


CANDIDATE
NAME

CENTRE
NUMBER

--	--	--	--	--

CANDIDATE
NUMBER

--	--	--	--



CAMBRIDGE INTERNATIONAL MATHEMATICS

0607/22

Paper 2 (Extended)

October/November 2019

45 minutes

Candidates answer on the Question Paper.

Additional Materials: Geometrical Instruments

READ THESE INSTRUCTIONS FIRST

Write your centre number, candidate number and name on all the work you hand in.

Write in dark blue or black pen.

Do not use staples, paper clips, glue or correction fluid.

You may use an HB pencil for any diagrams or graphs.

DO NOT WRITE IN ANY BARCODES.

Answer **all** the questions.

CALCULATORS MUST NOT BE USED IN THIS PAPER.

All answers should be given in their simplest form.

You must show all the relevant working to gain full marks and you will be given marks for correct methods even if your answer is incorrect.

The number of marks is given in brackets [] at the end of each question or part question.

The total number of marks for this paper is 40.

This document consists of **8** printed pages.

Formula List

For the equation $ax^2 + bx + c = 0$ $x = \frac{-b \pm \sqrt{b^2 - 4ac}}{2a}$

Curved surface area, A , of cylinder of radius r , height h . $A = 2\pi rh$

Curved surface area, A , of cone of radius r , sloping edge l . $A = \pi rl$

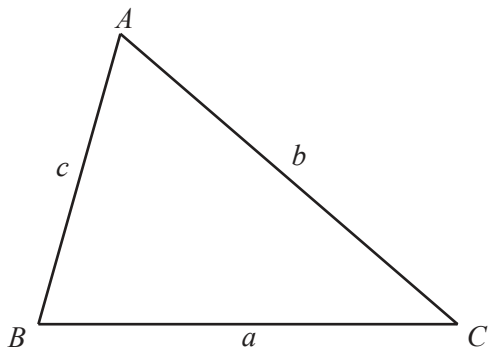
Curved surface area, A , of sphere of radius r . $A = 4\pi r^2$

Volume, V , of pyramid, base area A , height h . $V = \frac{1}{3}Ah$

Volume, V , of cylinder of radius r , height h . $V = \pi r^2 h$

Volume, V , of cone of radius r , height h . $V = \frac{1}{3}\pi r^2 h$

Volume, V , of sphere of radius r . $V = \frac{4}{3}\pi r^3$



$$\frac{a}{\sin A} = \frac{b}{\sin B} = \frac{c}{\sin C}$$

$$a^2 = b^2 + c^2 - 2bc \cos A$$

$$\text{Area} = \frac{1}{2}bc \sin A$$

Answer **all** the questions.

1 8 27 49 51 53 55 99

From this list write down the square number.

..... [1]

2 Change 3.2 metres into millimetres.

..... mm [1]

3 Write each number in standard form.

(a) 28010

..... [1]

(b) 0.100209

..... [1]

4 Each interior angle of a regular polygon is 170° .

Find the number of sides of this polygon.

..... [3]

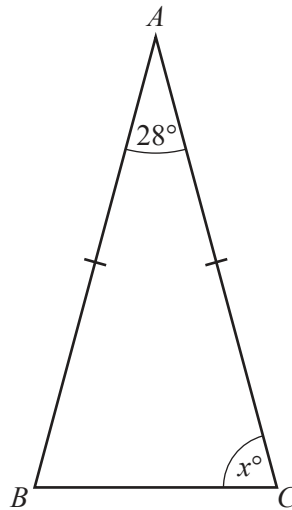
5 Xian walks 8 km in $1\frac{1}{2}$ hours.

She then runs 10 km in 45 minutes.

Find her average speed in km/h for the whole journey.

..... km/h [3]

6



NOT TO
SCALE

$$AB = AC$$

Find the value of x .

$x =$ [2]

- 7 The lengths of the sides of a right-angled triangle are 6 cm, 8 cm and 10 cm.

Find the tangent of the smallest angle.

..... [1]

- 8 Magda buys 6 apples and 4 oranges for a total cost of \$4.18 .
Oranges cost \$0.52 each.

Find the cost of one apple.

\$ [3]

- 9 The mean of five numbers is 16.
When two extra numbers are included the mean of the seven numbers is 20.

Find the mean of the two extra numbers.

..... [2]

- 10 The point A has co-ordinates $(1, -5)$ and the point B has co-ordinates $(9, 1)$.

Find the equation of the perpendicular bisector of AB in the form $y = mx + c$.

$y = \dots\dots\dots$ [5]

- 11 Factorise completely.

$$8x^2 - 18$$

$\dots\dots\dots$ [2]

12 (a) Simplify.

$$\sqrt{300} - \sqrt{27}$$

..... [2]

(b) Rationalise the denominator and simplify your answer.

$$\frac{14}{3 - \sqrt{2}}$$

..... [3]

13 Solve the equation.

$$3 \log x - \log 4 = 4 \log 2$$

$x =$ [3]

Questions 14 and 15 are printed on the next page.

14 Rearrange the formula to make x the subject.

$$y = 1 - \frac{x}{3x - 5}$$

$x = \dots\dots\dots$ [4]

15 An archer fires three arrows at a target.

The probability that the archer hits the target with each arrow is $\frac{3}{5}$.

Find the probability that the archer hits the target exactly twice.

$\dots\dots\dots$ [3]

Permission to reproduce items where third-party owned material protected by copyright is included has been sought and cleared where possible. Every reasonable effort has been made by the publisher (UCLES) to trace copyright holders, but if any items requiring clearance have unwittingly been included, the publisher will be pleased to make amends at the earliest possible opportunity.

To avoid the issue of disclosure of answer-related information to candidates, all copyright acknowledgements are reproduced online in the Cambridge Assessment International Education Copyright Acknowledgements Booklet. This is produced for each series of examinations and is freely available to download at www.cambridgeinternational.org after the live examination series.

Cambridge Assessment International Education is part of the Cambridge Assessment Group. Cambridge Assessment is the brand name of the University of Cambridge Local Examinations Syndicate (UCLES), which itself is a department of the University of Cambridge.